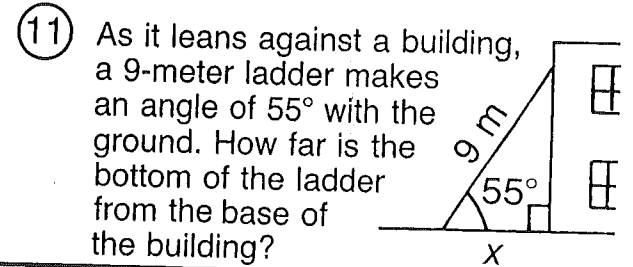
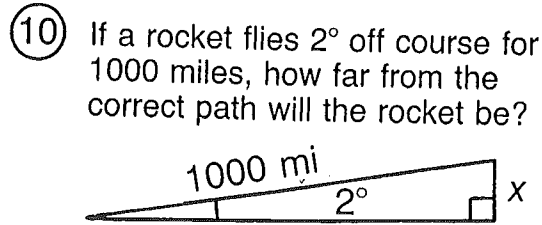
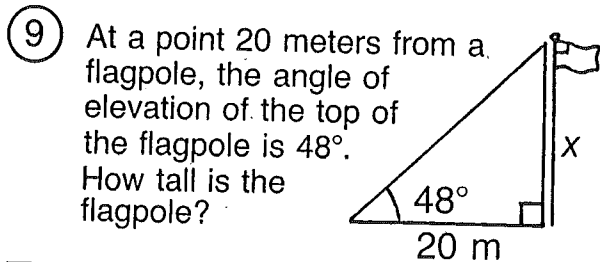
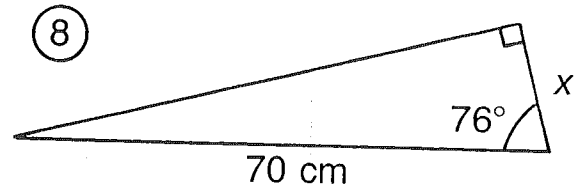
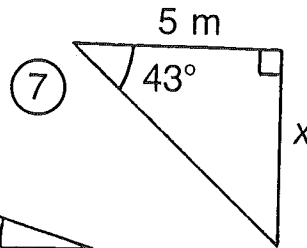
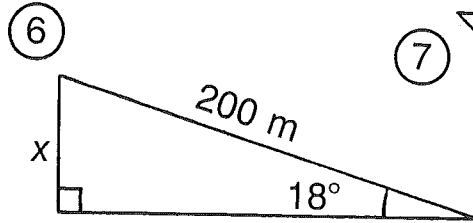
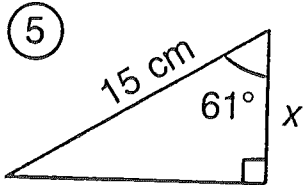
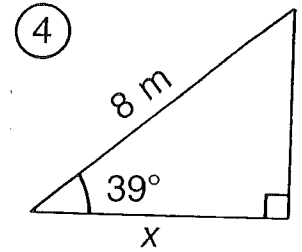
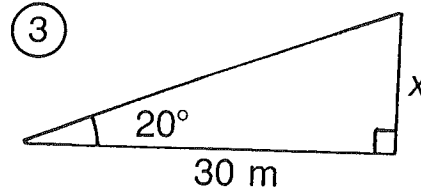
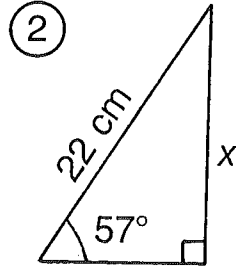
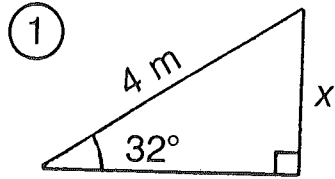


What Do They Call the Big Grass Field on an Orbiting Satellite?

For the first eight exercises, find the length x . For the remaining exercises, find the length needed to solve the problem. Round each answer to the nearest tenth. Cross out each box that contains a correct answer. When you finish, write the letters from the remaining boxes in the spaces at the bottom of the page.



TH	AP	ET	E	AR	UN	A	KI	SS
4.7 m	5.4 m	5.2 m	2.1 m	23.5 m	6.2 m	22.2 m	28.7 mi	61.8 m
RU	NS	TO	P	UP	A	KY	NI	CE
18.5 cm	3.2 m	7.3 cm	63.6 m	34.9 mi	15.3 cm	10.9 m	16.9 cm	17.1 cm